

Name _____

Lesson 4 Enrich

Time to the Quarter Hour

15 minutes is a quarter hour.

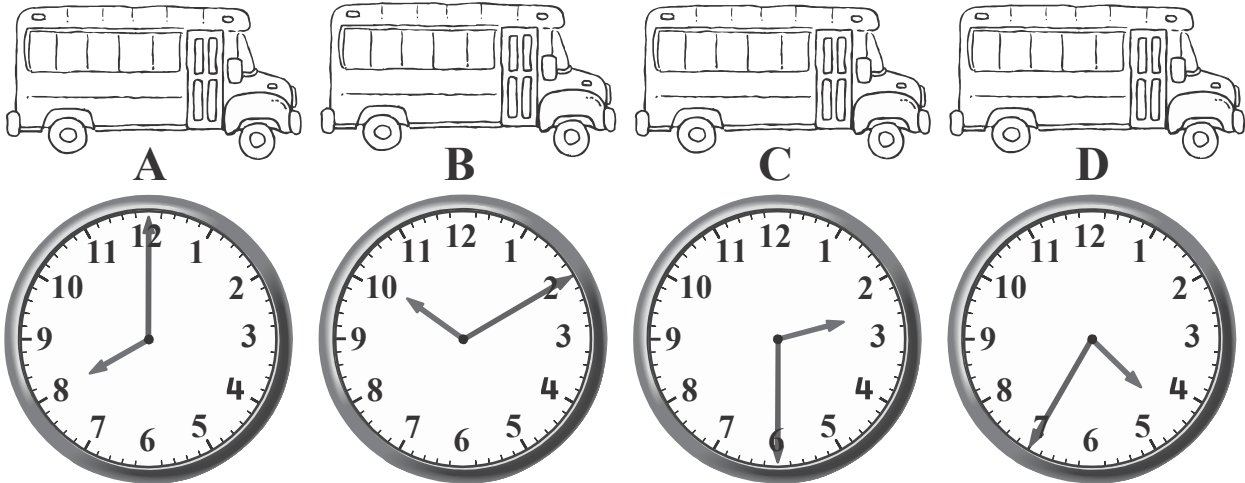
Draw a picture of four things that it takes you about a quarter hour to do.



Lesson 5 Enrich

Time to Five Minute Intervals

Each clock shows when the bus leaves the bus station. Use the picture to solve the problems.



1. Stan takes Bus A to work. start time end time
 The bus ride takes 25 minutes.
 At what time does Stan get to work? ___ : ___ ___ : ___

2. Jim takes Bus B to the city. start time end time
 The bus ride takes 35 minutes.
 At what time does Jim get to the city? ___ : ___ ___ : ___

3. Sally takes Bus C to the movies. start time end time
 The bus ride takes 45 minutes.
 At what time does Sally get to the movies? ___ : ___ ___ : ___


4. Maria takes Bus D to dance class. start time end time
 The bus ride takes 15 minutes.
 At what time does the bus get to class? ___ : ___ ___ : ___

Name _____

Lesson 6 Enrich


A.M. and P.M.

Use the pictures. Draw the hour and minute hands on the clock. Circle A.M. or P.M.



A.M.


P.M.



A.M.

P.M.

3.



A.M.

P.M.